

Name: _____

Pleasanton Primary Second Grade Math Log

November 16 - 20, 2009

1. Monday

A) Math flash cards: "Doubles-Plus-Two Facts" for Addition.

B) Is 208 *greater than*, *less than*, or *equal to* 309? Write your answer on the line below using the correct symbol: $>$, $<$, $=$

Answer: 208 _____ 309

C) Is 266 *greater than*, *less than*, or *equal to* 374? Write your answer on the line below using the correct symbol: $>$, $<$, $=$

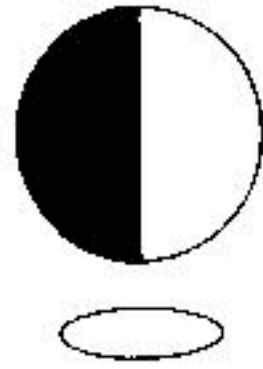
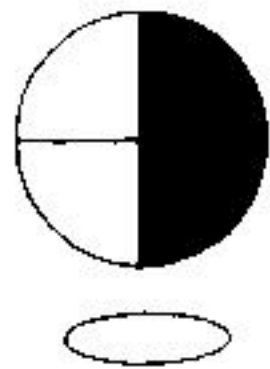
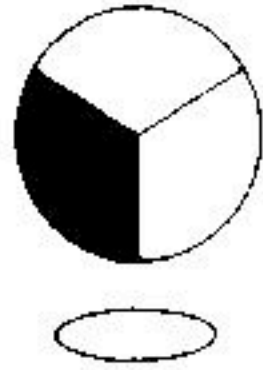
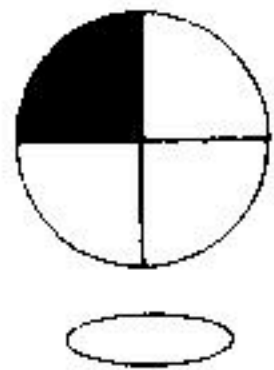
Answer: 266 _____ 374

Parent
Initials

2. Tuesday

A) Math flash cards: "Doubles-Plus-Two Facts" for Addition.

B) What picture shows $\frac{1}{4}$ of the circle shaded. Mark your answer below.




Parent
Initials

3. Wednesday

A) Math flash cards: "Doubles-Plus-Two Facts" for Addition.

B) Find the square that has $\frac{3}{4}$ shaded. Mark your answer below.



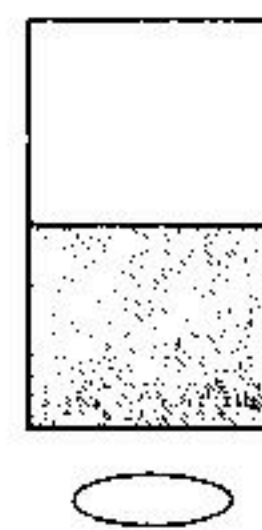


Parent
Initials

4. Thursday

A) Math flash cards: "Doubles-Plus-Two Facts" for Addition.

B) Which picture shows $\frac{2}{3}$ of the rectangle shaded? Mark your answer below.



Parent
Initials