

Name: \_\_\_\_\_

# Pleasanton Primary Second Grade Math Log

## February 22-26, 2010

### 1. Monday, February 22, 2010

- A) Math flash cards: Subtraction Set 4.  
 B) What is the value of the coins below?



Answer: \_\_\_\_\_

- C) Terri has a bag of pattern blocks. The table shows how many pattern blocks are in her bag.

Pattern Block	Number in Bag
Hexagon	4
Square	3
Triangle	2
Trapezoid	5

If Terri takes 1 pattern block from the bag without looking, which pattern block is she *least likely* to get?

- A. hexagon  
 B. square  
 C. triangle  
 D. trapezoid

Parent  
Initials

### 2. Tuesday, February 23, 2010

- A) Math flash cards: Subtraction Set 4.  
 B) Ms. Chapman has 21 students in her classroom. Due to illness, some children had to leave school. What information is needed to find the number of students that were still in Mrs. Chapman's class?

- A. The total students in Ms. Chapman's classroom  
 B. The number of students that went to PE  
 C. The number of students that went home ill  
 D. The number of classrooms in second grade

Parent  
Initials

### 3. Wednesday, February 24, 2010

- A) Math flash cards: Subtraction Set 4.  
 B) A car needed to be moved. Officer Douglas could not remember the number on the tow truck he was to use to move the car. Here are three clues to help Officer Douglas remember the number.

- the truck was  $> 6$
- the truck number was  $< 9$
- you say the number if you count by 2s starting with 2.

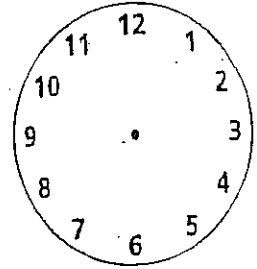
What is the number on the tow truck?

- A. 7  
 B. 8  
 C. 9  
 D. 10

Parent  
Initials

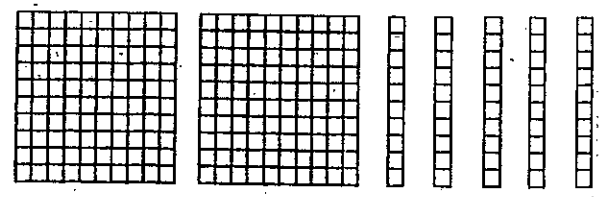
### 4. Thursday, February 25, 2010

- A) Math flash cards: Subtraction Set 4.  
 B) Show 1:05 p.m. on the two clocks below.

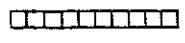


\_\_\_\_\_ : \_\_\_\_\_

- C) Look at the base-ten blocks below.



What number would be represented if one more



long is added?

Parent  
Initials

Answer: \_\_\_\_\_