

Name: _____

Pleasanton Primary First Grade Math Log

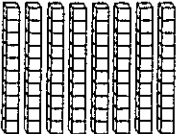

May 17 - 21, 2010

1. Monday, May 17, 2010

- A) Math fact practice on the back for Monday.
- B) Scott is thinking of a number. His number is greater than 91 and less than 94. What is Scott's number?

- A. 90
 B. 91
 C. 92
 D. 95

- C) Look at the place value mat below.

tens	ones
	


What number is represented?

Answer: _____

Parent
Initials

2. Tuesday, May 18, 2010

- A) Math fact practice on the back for Tuesday.
- B) Which clock shows half past 10?



Parent
Initials

3. Wednesday, May 19, 2010

- A) Math fact practice on the back for Wednesday.
- B) Look at the pattern below.

3, 13, 23, 33, 43, _____, _____




Which set of numbers below completes the pattern?


- A. 44, 45
 B. 44, 54
 C. 53, 63
 D. 53, 54


Parent
Initials

4. Thursday, May 20, 2010

- A) Math fact practice on the back for Thursday.
- B) The number of flowers in the brown pot is 1 less than in the pink pot. How would you show the flowers in the brown pot on the graph?

Pot	Number of Flowers
White Pot	
Brown Pot	_____
Pink Pot	
Green Pot	

Each  stands for 1 flower.



Parent
Initials