

Name: _____

Pleasanton Primary First Grade Math Log

March 8 - 12, 2010

1. Monday, March 8, 2010

- A) Math fact practice on the back for Monday.
- B) Eli and Tammy were playing a game with base-ten blocks. Tammy's place value mat is shown below.

Tens	Ones
□□□□□□□□	□ □
□□□□□□□□	□ □
□□□□□□□□	□ □
□□□□□□□□	□ □
□□□□□□□□	□
□□□□□□□□	□
□□□□□□□□	□

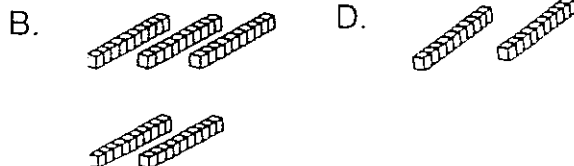
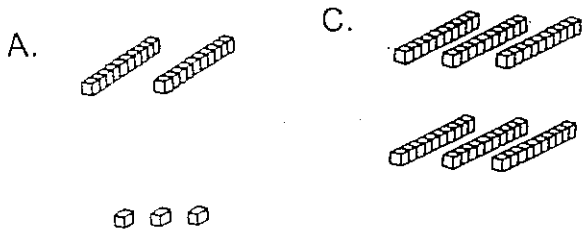
Based on Tammy's place value mat above, which of the following is true?

- A. She could trade 10 ones for a long (rod of ten).
- B. She can't trade her ones for a long (rod of ten) because she doesn't have enough ones.
- C. She could count all of her base-ten blocks and she would have 69.
- D. She could count all of her base-ten blocks and she would have 60.

Parent Initials

2. Tuesday, March 9, 2010

- A) Math fact practice on the back for Tuesday.
- B) Look at the base-ten blocks below. Which group is greater than 50?



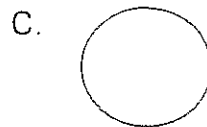

Parent Initials

3. Wednesday, March 10, 2010

- A) Math fact practice on the back for Wednesday.
- B) Look at the circle below.





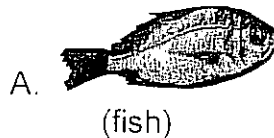
Which of the following covers *more* area than the circle above?



Parent Initials

4. Thursday, March 11, 2010

- A) Math fact practice on the back for Thursday.
- B) Which of the following below would cover the *least* area?



Parent Initials